



Orchid pollen sac
Color-Enhanced SEM
Magnification: 12X

Pollen sac on bee

Pollen sac in orchid
sticks to bee

THEME FOCUS Cause and Effect
Environmental change can result in a change in allele frequencies of a population over time.

BIG Idea The theory of evolution is supported by natural selection and explains the diversity of life.

Section 1 • Darwin's Theory of Evolution by Natural Selection

Section 2 • Evidence of Evolution

Section 3 • Shaping Evolutionary Theory



Section 1

Reading Preview

Essential Questions

- What evidence convinced Darwin that species could change over time?
- What are the four principles of natural selection?
- How can natural selection change a population?

Review Vocabulary

selective breeding: the process by which a breeder develops a plant or animal to have certain traits

New Vocabulary

artificial selection
natural selection
evolution



Multilingual eGlossary



Figure 1 Charles Darwin (1809–1882) posed for this portrait shortly after he returned from his voyage aboard the *HMS Beagle*.

Darwin's Theory of Evolution by Natural Selection

Think Idea Charles Darwin developed a theory of evolution based on natural selection.

Real-World Reading Link Today, a jet can travel from London to New York in hours. Imagine how different things were when it took almost five years for Charles Darwin to circle the globe aboard a small, cramped ship.

Developing the Theory of Evolution

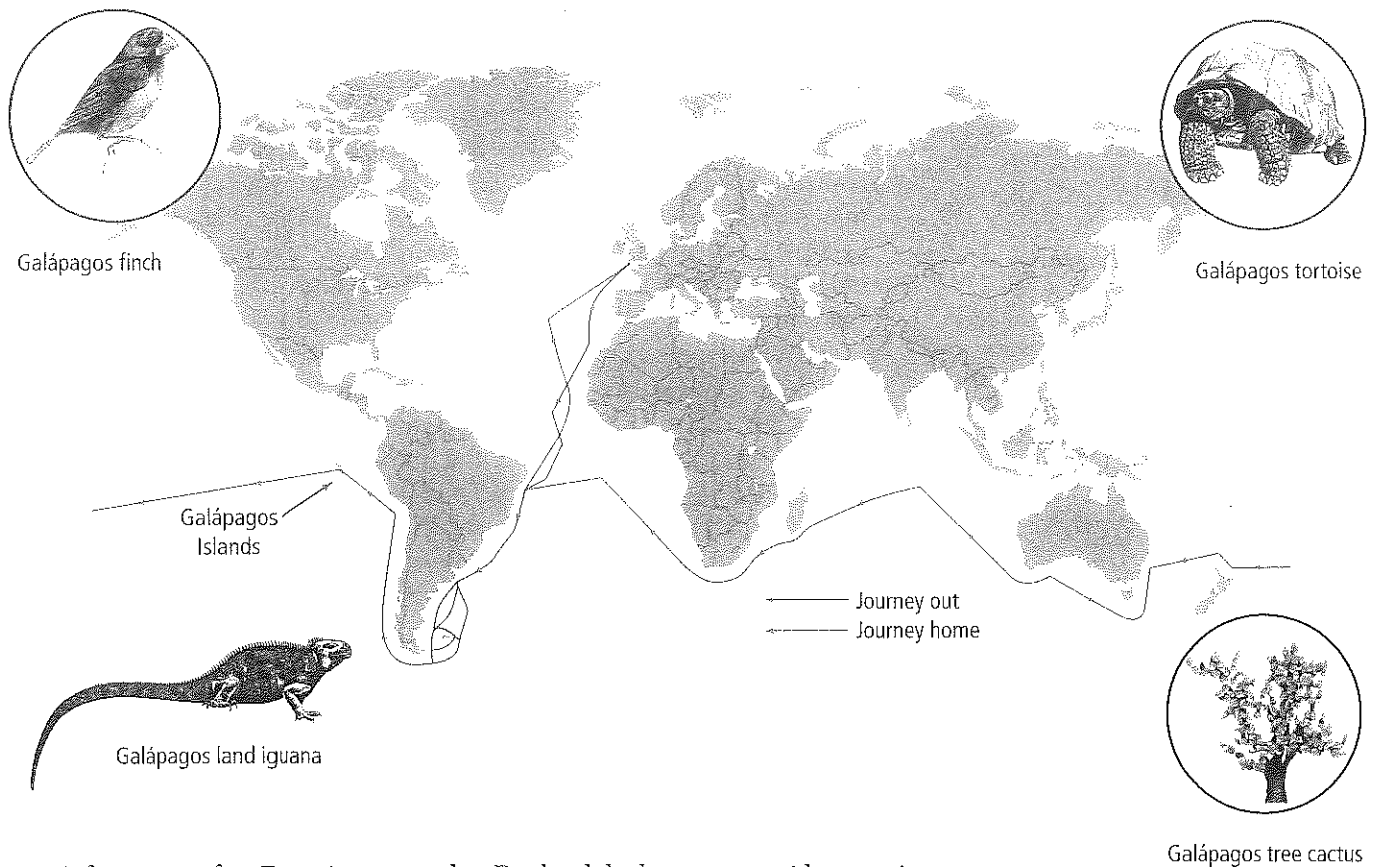
When Charles Darwin, shown in **Figure 1**, boarded the *HMS Beagle* in 1831, the average person thought that the world was about 6000 years old. Almost everyone, including the young Darwin, thought that animals and plants were unchanging. The concept of gradual change over time was still years away.

Darwin on the HMS Beagle The primary mission of the *Beagle* was to survey the coast of South America. In 1831, the *Beagle* set sail from England for Maderia and then proceeded to South America, as shown on the map in **Figure 2**. Darwin's role on the ship was as a naturalist and companion to the captain. His job was to collect biological and geological specimens during the ship's travels. Darwin had a degree in theology from Christ's College, Cambridge, although he previously had studied medicine and the sciences.

Over the course of the ship's five-year voyage, Darwin made extensive collections of rocks, fossils, plants, and animals. He also read a copy of Charles Lyell's *Principles of Geology*—a book proposing that Earth was millions of years old. This book influenced his thinking as he observed fossils of marine life at high elevations in the Andes, unearthed giant fossil versions of smaller living mammals, and saw how earthquakes could lift rocks great distances very quickly.

The Galápagos Islands In 1835, the *Beagle* arrived in the Galápagos (guh LAH puh gus) Islands off the coast of South America. Darwin was initially disappointed by the stark barrenness of these volcanic islands. However, as he began to collect mockingbirds, finches, and other animals on the four islands that he visited, he noticed that the different islands seemed to have their own, slightly different varieties of animals. These differences, however, only sparked a mere curiosity. He took little notice of the comment from the colony's vice governor that the island origins of the giant tortoises could be identified solely by the appearance of the tortoises' shells.

Reading Check Summarize some of the experiences or observations that influenced Darwin during his voyage on the *Beagle*.



A few years after Darwin returned to England, he began reconsidering his observations. He took note of the work of John Gould, an ornithologist who was classifying the birds Darwin brought back from the Galápagos. Gould discovered that the Galápagos finches were separate species and determined that the finches of the Galápagos did not live anywhere else in South America. In fact, almost every specimen that Darwin had collected on the islands was new to European scientists. These new species most closely resembled species from mainland South America, although the Galápagos and the mainland had different environments. Island and mainland species should not have resembled one another so closely unless, as Darwin began to suspect, populations from the mainland changed after reaching the Galápagos.

Darwin continued his studies Darwin hypothesized that new species could appear gradually through small changes in ancestral species, but he could not see how such a process would work. To understand it better, he turned to animal breeders—pigeon breeders in particular.

Different breeds of pigeons have certain distinctive traits that also are present in these breeds' offspring. A breeder can promote these traits by selecting and breeding pigeons that have the most exaggerated expressions of those traits. For example, to produce pigeons with fan-shaped tails, the breeder will breed pigeons with the most fan-shaped tails. The process of directed breeding to produce offspring with desired traits, referred to as selective breeding was called **artificial selection** by Darwin.

Artificial selection also occurs when humans develop new breeds of dogs or new strains of crop plants. Darwin inferred that if humans could change species by artificial selection, then perhaps the same process could work in nature. Further, Darwin thought that, given enough time, perhaps this process could produce new species.

Figure 2 The map shows the route of the *Beagle's* voyage. The species shown are all unique to the Galápagos Islands.
Infer How did the first organisms reach the Galápagos Islands?



APPLYING PRACTICES

Apply Concepts of Statistics and Probability Go to the resources tab in ConnectED to find the Applying Practices worksheet *Could you beat natural selection using camouflage?*


FOLDABLES

Incorporate information from this section into your Foldable.

Natural selection While thinking about artificial selection, Darwin read an essay by economist Thomas Malthus. The essay suggested that the human population, if unchecked, eventually would outgrow its food supply, leading to a competitive struggle for existence. Darwin realized that Malthus's ideas could be applied to the natural world. He reasoned that some competitors in the struggle for existence would be better equipped for survival than others. Those less equipped would die. This is the process of **natural selection**. Here, finally, was the framework for a new theory about the origin of species.

Darwin's theory of evolution by natural selection has four basic principles that explain how traits of a population can change over time. First, individuals in a population show differences, or variations. Second, variations can be inherited, meaning that they are passed down from parent to offspring. Third, organisms have more offspring than can survive on available resources. The average cardinal, for example, lays nine eggs each summer. If each baby cardinal survived and reproduced just once, it would take only seven years for the first pair to have produced one million birds. Finally, variations that increase reproductive success will have a greater chance of being passed on than those that do not increase reproductive success. If having a fantail helps a pigeon reproduce successfully, future generations would include more pigeons with fan-shaped tails.

Given enough time, natural selection could modify a population enough to produce a new species. Natural selection is now considered the mechanism by which evolution takes place. **Figure 3** shows how natural selection might modify a population of sunflowers.

 **Reading Check** Explain the four principles of natural selection.

DATA ANALYSIS LAB 1

Based on Real Data*

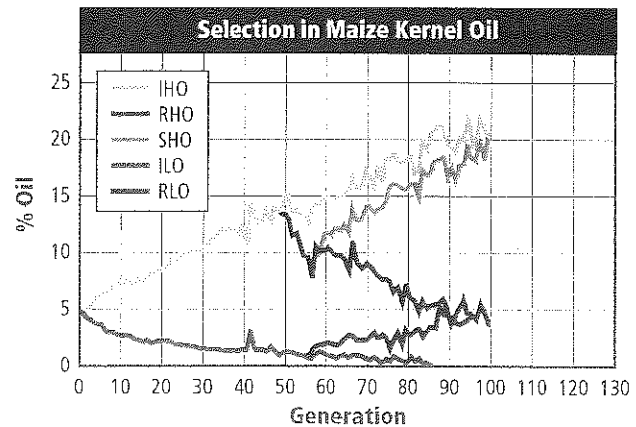
Interpret the Data

How did artificial selection change corn? Plant breeders have made many changes to crops. In one of the longest experiments ever conducted, scientists selected maize (corn) for oil content in kernels.

Data and Observations

Look at the graph and compare the selection in the different plant lines.

Line IHO was selected for high oil content, and line ILO was selected for low oil content. The direction of selection was reversed in lines RHO (started from IHO) and RLO (started from ILO) at generation 48. In line SHO (derived from RHO), selection was switched back to high oil content at generation 55.



Think Critically

- 1. Measure** What were the highest and lowest percentages of oil seen in the experiment?
- 2. Predict** If the trend continues for line RHO, approximately how many generations will it take until the oil content reaches zero percent?

*Data obtained from: Hill, W. G. 2005. A century of corn selection. *Science* 307: 683-684.



Visualizing Natural Selection

Figure 3


Natural selection is the mechanism by which, if given enough time, a population—in this case, a population of sunflowers—could be modified to produce a new species. There are four principles of natural selection that explain how this can occur: variation, heritability, overproduction, and reproductive advantage.



Variation Individuals in a population differ from one another. For example, some sunflowers are taller than others.



Heritability Variations are inherited from parents. Tall sunflowers produce tall sunflowers, and short sunflowers produce short sunflowers.




Overproduction Populations produce more offspring than can survive. Each sunflower has hundreds of seeds, most of which will not germinate.

Reproductive Advantage Some variations allow the organism that possesses them to have more offspring than the organism that does not possess them. For example, in this habitat, shorter sunflowers reproduce more successfully.



Over time, the average height of the sunflower population is short if the short sunflowers continue to reproduce more successfully. After many generations, the short sunflowers might become a new species if they are unable to breed with the original sunflowers.



Animation

Table 1**Basic Principles of Natural Selection**

Interactive Table

Principle	Example
Individuals in a population show variations among others of the same species.	The students in a classroom all look different.
Variations are inherited.	You look similar to your parents.
Animals have more young than can survive on the available resources.	The average cardinal lays nine eggs per summer. If each cardinal lived only one year and all offspring survived, in seven years there would be a million cardinals.
Variations that increase reproductive success will be more common in the next generation.	If having a fan-shaped tail increases the reproductive success of pigeons, then more pigeons in the next generation will have fan-shaped tails.

The Origin of Species

Darwin had likely formulated his theory of evolution by natural selection by about 1840. Soon after, he began writing a multivolume book compiled of evidence for evolution and explaining how natural selection might provide a mechanism for the origin of species. **Table 1** summarizes the principles of natural selection described in Darwin's work. He continued to compile evidence in support of his theory for many years. For example, he spent eight years studying relationships among barnacles.

In 1858, Alfred Russel Wallace, another English naturalist, proposed a theory that was almost identical to Darwin's theory. Both men's ideas were presented to the Linnean Society of London. One year later, Darwin published *On the Origin of Species by Means of Natural Selection*—a condensed version of the book he had started many years before.

In his book, Darwin used the term *evolution* only on the last page. Today, biologists use the term **evolution** to define cumulative changes in groups of organisms through time. Natural selection is not synonymous with evolution; it is a mechanism by which evolution occurs.

VOCABULARY

Word Origin

Evolve

comes from the Latin word *evolvere*, meaning *unroll* or *unfold*

Section 1 Assessment

Section Summary

- Darwin drew from his observations on the HMS *Beagle* and later studies to develop his theory of evolution by natural selection.
- Natural selection is based on ideas of variation, inheritance, excess reproduction, and advantages of certain traits in certain environments.
- Darwin reasoned that the process of natural selection eventually could result in the appearance of new species.

Understand Main Ideas

1. **Read** Describe the evidence Charles Darwin gathered that led to his theory of evolution.
2. **Explain** how the idea of artificial selection contributed to Darwin's ideas on natural selection.
3. **Identify** the four principles of natural selection and provide examples not used in this section.
4. **Discuss** Wallace's contribution to the theory of evolution by natural selection.

Think Critically

5. **Infer** the consequences for evolution if species did not vary.

WRITING IN Biology

6. Write a short story about what it might have been like to visit the Galápagos Islands with Darwin.



Section 2

Reading Preview

Essential Questions

- How do fossils provide evidence of evolution?
- How does morphology provide evidence of evolution?
- How does biochemistry provide evidence of evolution?

Review Vocabulary

fossil: remains of an organism or its activities

New Vocabulary

derived trait
ancestral trait
homologous structure
vestigial structure
analogous structure
embryo
biogeography
fitness
camouflage
mimicry



Multilingual eGlossary

Evidence of Evolution

Key Idea Multiple lines of evidence support the theory of evolution.

Real-World Reading Link The evidence for evolution is like a set of building blocks. Just as you cannot build something with only one building block, one piece of evidence does not make a theory. The evidence for evolution is more convincing when it is supported by many pieces of evidence, just as a structure is more sturdy when it is built with many blocks.

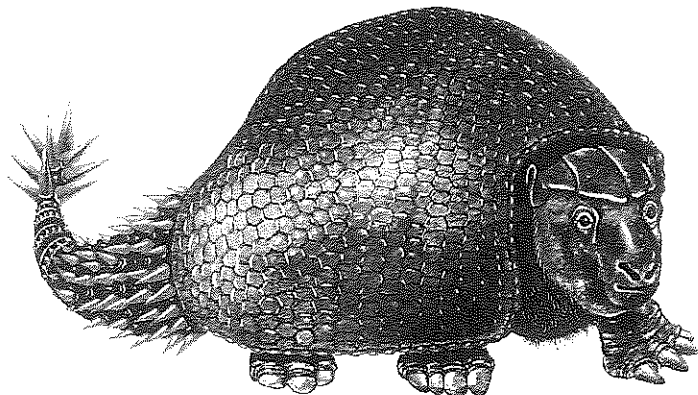
Support for Evolution

Darwin's book *On the Origin of Species* demonstrated how evolution might happen. The book also provided evidence that evolution has occurred on our planet. The concepts of natural selection and evolution are different, though related. Darwin's theory of evolution by natural selection is part of the larger theory of evolution. Recall that a theory provides an explanation for a natural phenomenon based on observations. Theories explain available data and suggest further areas for experimentation. The theory of evolution states that all organisms on Earth have descended from a common ancestor.


The fossil record Fossils provide a record of species that lived long ago, and they supply some of the most significant evidence of evolutionary change. This record can show how ancient species are similar to current species, as illustrated in **Figure 4**. Fossils also show that some species, such as the horseshoe crab, have remained unchanged for millions of years. The fossil record is an important source of information for determining the ancestry of organisms and patterns of evolution.

Figure 4 The giant armadillo-like glyptodont, *Glyptodon*, is an extinct animal that Darwin thought must have been related to living armadillos.

Observe What features of the 2000-kg glyptodont are similar to those of the 4-kg armadillo?



Glyptodont



Armadillo





✦ **Figure 5** This artist's rendering of *Archaeopteryx* shows that it shares many features with modern birds while retaining ancestral dinosaur features.

Connection to Earth Science

Although Darwin recognized the limitations of the fossil record, he predicted the existence of fossils intermediate in form between species. Today, scientists studying evolutionary relationships have found hundreds of thousands of transitional fossils that contain features shared by different species. For example, certain dinosaur fossils show feathers of modern birds and teeth and bony tails of reptiles. **Figure 5** shows an artist's rendering of *Archaeopteryx*, one of the first birds. *Archaeopteryx* fossils provide evidence of characteristics that classify it as a bird, and also show that the bird retained several distinct dinosaur features.

Researchers consider two major classes of traits when studying transitional fossils: derived traits and ancestral traits. **Derived traits** are newly evolved features, such as feathers, that do not appear in the fossils of common ancestors. **Ancestral traits**, on the other hand, are more primitive features, such as teeth and tails, that do appear in ancestral forms. Transitional fossils provide detailed patterns of evolutionary change for the ancestors of many modern animals, including mollusks, horses, whales, and humans.

Comparative anatomy Why do the vertebrate forelimbs shown in **Figure 6** have different functions but appear to be constructed of similar bones in similar ways? Evolutionary theory suggests that the answer lies in shared ancestry.

Homologous structures Anatomically similar structures inherited from a common ancestor are called **homologous structures**. Evolution predicts that an organism's body parts are more likely to be modifications of ancestral body parts than they are to be entirely new features. The limbs illustrated in **Figure 6** move animals in different ways, yet they share similar construction. Bird wings and reptile limbs are another example. Although birds use their wings to fly and reptiles use their limbs to walk, bird wings and reptile forelimbs are similar in shape and construction, which indicates that they were inherited from a common ancestor. While homologous structures alone are not evidence of evolution, they are an example for which evolution is the best available explanation for the biological data.

VOCABULARY

WORD ORIGIN

Homologous

comes from the Greek words *homos*, meaning *same*, and *logos*, meaning *relation or reasoning*

APPLYING PRACTICES

Communicate Scientific Information Go to the resources tab in ConnectED to find the Applying Practices worksheet *Evidence for Evolution*.

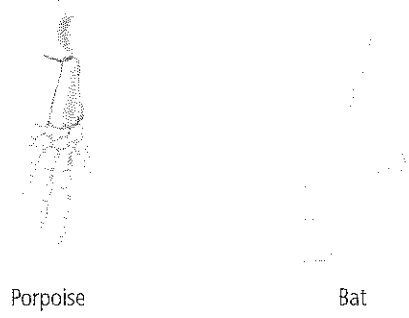
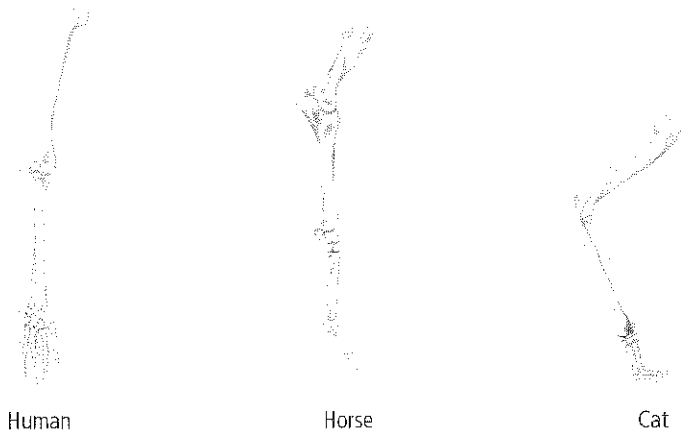


Figure 6 The forelimbs of vertebrates illustrate homologous structures. Each limb is adapted for different uses, but they all have similar bones.
Infer which of the forelimbs shown would most likely resemble a whale's pectoral fin.

Vestigial structures In some cases, a functioning structure in one species is smaller or less functional in a closely related species. For example, most birds have wings developed for flight. Kiwis, however, have very small wings that cannot be used for flying. The kiwi wing is a kind of homologous structure called a vestigial structure. **Vestigial structures** are structures that are the reduced forms of functional structures in other organisms. **Table 2** illustrates some vestigial structures in different species. Evolutionary theory predicts that features of ancestors that no longer have a function for that species will become smaller over time until they are lost.

Table 2		Vestigial Structures		Interactive Table
Trait	Example	Description		
Snake pelvis		The pelvis is the attachment point for legs and is therefore nonfunctional in an animal without legs.		
Kiwi wings		The wings of kiwis are too small to be of any use in flight.		
Human appendix		This is a 5- to 15-cm-long structure that is important for digestion in many mammals, but is of limited use in humans and some apes.		


©JohnCarnemollar/Stock/Getty Images Plus/Getty Images; (B)Tim Fuller

◁ **Figure 7** Eagles and insects use their wings to fly, but their wing structures are different.

Explain how scientists know that the wings of eagles and insects are analogous structures.



Bald eagle



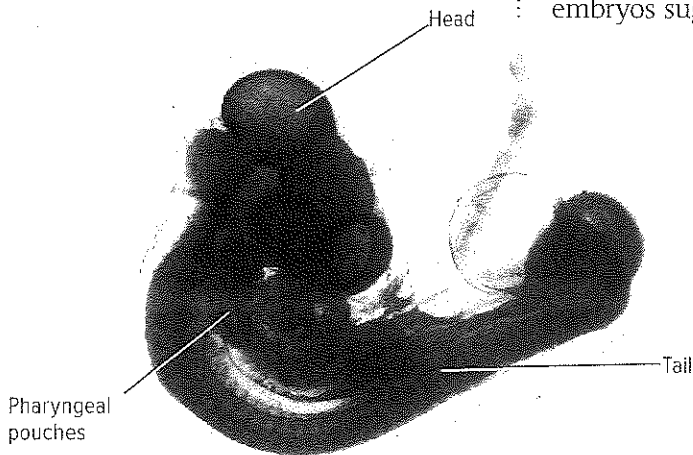
Dragonfly

Not all anatomically similar features are evidence of common ancestry. **Analogous structures** can be used for the same purpose and can be superficially similar in construction but are not inherited from a common ancestor. As shown in **Figure 7**, the wings of an eagle and the wings of a dragonfly have the same function. They both enable the organism to fly. However, the wings are constructed in different ways and from different materials. While analogous structures do not indicate close evolutionary relationships, they do show that functionally similar features can evolve independently in similar environments.

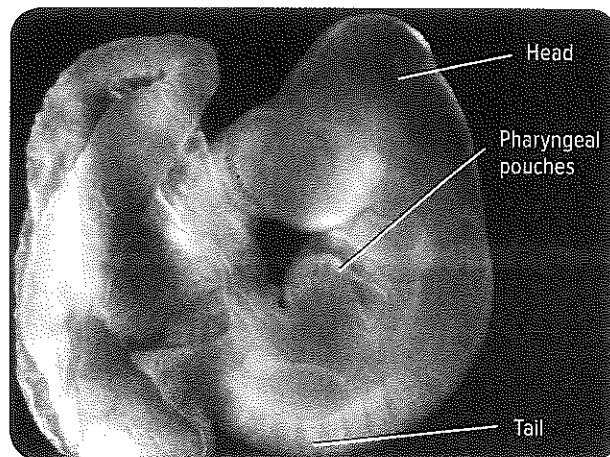
✓ **Reading Check** Explain why vestigial structures are considered examples of homologous structures.

Comparative embryology Vertebrate embryos provide more glimpses into evolutionary relationships. An **embryo** is an early, pre-birth stage of an organism's development. Scientists have found that vertebrate embryos exhibit homologous structures during certain phases of development but become totally different structures in the adult forms. The embryos shown in **Figure 8**, like all vertebrate embryos, have a tail and paired structures called pharyngeal pouches. In fish, the pouches develop into gills. In reptiles, birds, and mammals, these structures become parts of the ears, jaws, and throats. Although the adult forms differ, the shared features in the embryos suggest that vertebrates evolved from a shared ancestor.

≅ **Figure 8** Embryos reveal evolutionary history. Bird and mammal embryos share several developmental features.



Bird embryo



Mammal embryo

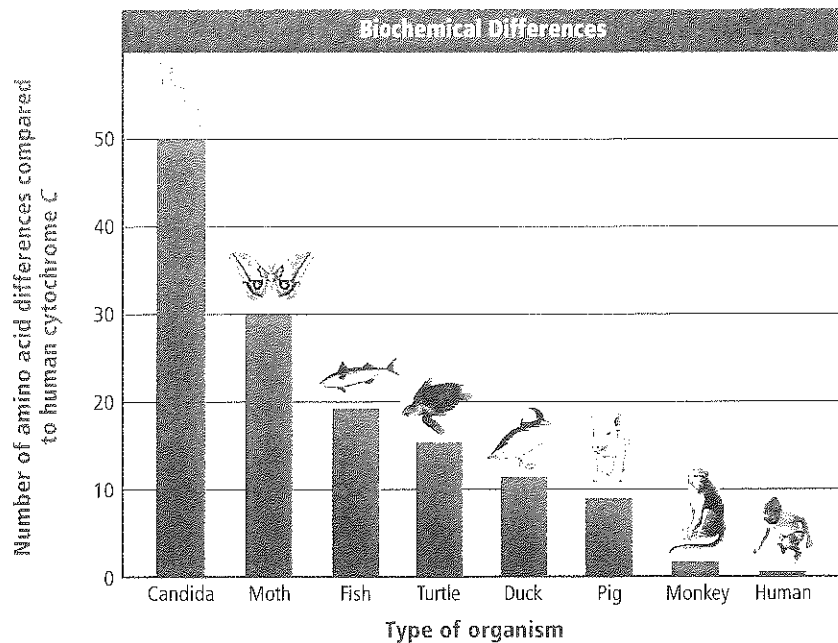


Figure 9 This illustration compares amino acid sequences of cytochrome *c* in humans and other organisms.

Infer Would the cytochrome *c* of a reptile or a bird be expected to have more amino acid differences when compared with that of a human? Explain.


Comparative biochemistry Scientific data also show that common ancestry can be seen in the complex metabolic molecules that many different organisms share. Cytochrome *c* is an enzyme that is essential for respiration and is highly conserved in animals. This means that despite slight variations in its amino acid sequence, the molecule has changed very little over time.

Evolutionary theory predicts that molecules in species with a recent common ancestor should share certain ancient amino acid sequences. The more closely related the species are, the greater the number of sequences that will be shared. This predicted pattern is what scientists find to be true in cytochrome *c*. For example, as illustrated in **Figure 9**, the cytochrome *c* in the pig and in the monkey share more amino acid sequences with humans than the cytochrome *c* in the duck shares with humans.


Connection to Chemistry Scientists have found similar biochemical patterns in other proteins, as well as in DNA and RNA. DNA and RNA form the molecular basis of heredity in all living organisms. The fact that many organisms have the same complex molecules suggests that these molecules evolved early in the history of life and were passed on through the life-forms that have lived on Earth. Comparisons of the similarities in these molecules across species reflect evolutionary patterns seen in comparative anatomy and in the fossil record. Organisms with closely related morphological features have more closely related molecular features.

Geographic distribution The distribution of plants and animals that Darwin saw during his South American travels first suggested evolution to Darwin. He observed that animals on the South American mainland were more similar to other South American animals than they were to animals living in similar environments in Europe. The South American mara, for example, inhabited a niche that was occupied by the English rabbit. You can compare a mara and an English rabbit in **Figure 10**. Darwin realized that the mara was more similar to other South American species than it was to the English rabbit because it shared a closer ancestor with the South American animals.

Figure 10 The mara (*Dolichotis patagonum*) exists in a niche similar to that of the English rabbit (*Oryctolagus cuniculus*).



Mara



English rabbit



Patterns of migration were critical to Darwin when he was developing his theory. Migration patterns explained why, for example, islands often have more plant diversity than animal diversity: the plants are more able to migrate from the closest mainland as seeds, either by wind or on the backs of birds. Since Darwin's time, scientists have confirmed and expanded Darwin's study of the distribution of plants and animals around the world in a field of study now called **biogeography**. Evolution is intimately linked with climate and geological forces, especially plate tectonics, which helps explain many ancestral relationships and geographic distributions seen in fossils and living organisms today.

Adaptation

The five categories discussed in the previous section—the fossil record, comparative anatomy, comparative embryology, comparative biochemistry, and geographic distribution—offer evidence for evolution. Darwin drew on all of these except biochemistry—which was not well developed in his time—to develop his own theory of evolution by natural selection. At the heart of his theory lies the concept of adaptation.

Types of adaptation An adaptation is a trait shaped by natural selection that increases an organism's reproductive success. One way to determine how effectively a trait contributes to reproductive success is to measure fitness. **Fitness** is a measure of the relative contribution that an individual trait makes to the next generation. It often is measured as the number of reproductively viable offspring that an organism produces in the next generation.

The better an organism is adapted to its environment, the greater its chances of survival and reproductive success. This concept explains the variations Darwin observed in the finches' beaks on the Galápagos Islands. Because the environments differed on each island, different beak characteristics were selected for.

Camouflage Some species have evolved morphological adaptations that allow them to blend in with their environments. This is called **camouflage** (KA muh flahj). Camouflage allows organisms to become almost invisible to predators, as shown in **Figure 11**. As a result, more of the camouflaged individuals survive and reproduce.

VOCABULARY


SCIENCE USAGE • CAMOUFLAGE

Adaptation

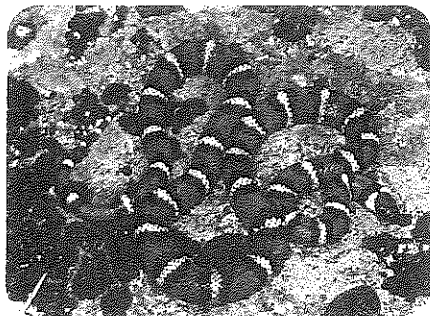
Science usage: a trait shaped by natural selection to increase the survival or reproductive success of an organism
The prehensile tail of monkeys is an adaptation for life in trees.

Common usage: adjustment or change

The movie script is an adaptation of the original play.



* **Figure 11** It would be easy for a predator to overlook this Arctic hare (*Lepus arcticus*) in a snowy environment because of the animal's effective camouflage.



Kingsnake



Coral snake

Figure 12 Predators avoid the harmless kingsnake because it has color patterns similar to those of the poisonous coral snake.

Mimicry Another type of morphological adaptation is mimicry. In **mimicry**, one species evolves to resemble another species. You might expect that mimicry would make it difficult for individuals in one species to find and breed with other members of their species, thus decreasing reproductive success. However, mimicry often increases an organism's fitness. Mimicry can occur in a harmless species that has evolved to resemble a harmful species, such as the example shown in **Figure 12**. Sometimes mimicry benefits two harmful species. In both cases, the mimics are protected because predators can't always tell the mimic from the animal that it is mimicking, so they learn to avoid them both.

 **Reading Check** Compare mimicry and camouflage.

Antimicrobial resistance Species of bacteria that originally were killed by penicillin and other antibiotics have developed drug resistance. For almost every antibiotic, at least one species of resistant bacteria exists. One unintended consequence of the continued development of antibiotics is that some diseases, which were once thought to be contained, such as tuberculosis, have re-emerged in more harmful forms.

APPLYING PRACTICES

Construct an Explanation Based on Evidence Go to the resources tab in Connected to find the Applying Practices worksheet *Pest Management and Natural Selection*.

MiniLab 1

Investigate Mimicry



Why do some species mimic the features of other species? Mimicry is the process of natural selection that shapes one species of organism to look similar to another species. Natural selection has shaped the nontoxic viceroy butterfly to look like the toxic monarch butterfly. Investigate the mimicry displayed during this lab.

Procedure

1. Read and complete the lab safety form.
2. Create a data table for recording your observations and measurements of the **monarch** and **viceroy** butterflies.
3. Observe the physical characteristics of both butterfly species and record your observations in your data table.

Analysis

1. **Compare and contrast** the physical characteristics of the two butterfly species.
2. **Hypothesize** why the viceroy butterflies have bright colors that are highly visible.






Figure 13 Spaces between arches set in a square to support a dome are called spandrels and are often decorative. Some features in organisms might be like spandrels, a consequence of another adaptation.

Consequences of adaptations Not all features of an organism are necessarily adaptive. Some features might be consequences of other evolved characteristics. Biologists Stephen Jay Gould and Richard Lewontin made this point in 1979 in a paper claiming that biologists tended to overemphasize the importance of adaptations in evolution.

Spandrel example To illustrate this concept, they used an example from architecture. Building a set of four arches in a square to support a dome means that spaces called spandrels will appear between the arches, as illustrated in **Figure 13**. Because spandrels are often decorative, one might think that spandrels exist for decoration. In reality, they are an unavoidable consequence of arch construction. Gould and Lewontin argued that some features in organisms are like spandrels because even though they are prominent, they do not increase reproductive success. Instead, they likely arose as an unavoidable consequence of prior evolutionary change.

Human example A biological example of a spandrel is the helplessness of human babies. Humans give birth at a much earlier developmental stage than other primates do. This causes them to need increased care early in their lives. Many scientists think that the helplessness of human babies is a consequence of the evolution of big brains and upright posture. To walk upright, humans need narrow pelvises, which means that babies' heads must be small enough to fit through the pelvic opening at birth. In contrast, scientists previously thought that the helplessness of human infants provided an adaptive advantage, such as increased attention from parents and more learning.

Section 2 Assessment

Section Summary

- Fossils provide strong direct evidence to support evolution.
- Homologous and vestigial structures indicate shared ancestry.
- Examples of embryological and biochemical traits provide insight into the evolution of species.
- Biogeography can explain why certain species live in certain locations.
- Natural selection gives rise to features that increase reproductive success.

Understand Main Ideas

1. **Describe** how fossils provide evidence of evolution.
2. **Explain** what natural selection predicts about mimicry, camouflage, homologous structures, and vestigial structures.
3. **Indicate** how biochemistry provides evidence of evolution.
4. **Compare** the morphological evidence and the biochemical evidence supporting evolution.

Think Critically

5. **Hypothesize** Evidence suggests that the bones in bird wings share a number of features with the bones of dinosaur arms. Based on this evidence, what hypothesis could you make about the evolutionary relationship between birds and dinosaurs?
6. **Apply** Research has shown that if a prescribed dose of an antibiotic is not taken completely, some bacteria might not be killed and the disease might return. How does natural selection explain this phenomenon?



Section 3

Reading Preview

Essential Questions


- What are the conditions of the Hardy-Weinberg principle?
- What patterns can be observed in evolution?
- What factors influence speciation?

Review Vocabulary

allele: alternate forms of a character trait that can be inherited

New Vocabulary

Hardy-Weinberg principle
genetic drift
founder effect
bottleneck
stabilizing selection
directional selection
disruptive selection
sexual selection
prezygotic isolating mechanism
postzygotic isolating mechanism
allopatric speciation
sympatric speciation
adaptive radiation
gradualism
punctuated equilibrium


 Multilingual eGlossary

APPLYING PRACTICES

Construct an Explanation Based on Evidence Go to the resources tab in ConnectED to find the Applying Practices worksheet *Can scientists model natural selection?*

Figure 14 According to the Hardy-Weinberg principle, even though the number of owls doubled, the ratio of gray to red owls remained the same.

Shaping Evolutionary Theory

 **The theory of evolution continues to be refined as scientists learn new information.**


Real-World Reading Link The longer you operate a complicated piece of electronics, the better you understand how it works. The device does not change, but you become more familiar with its functions. Scientists have been studying evolution for almost 150 years, yet they are still learning new ways in which evolution leads to changes in species.

Mechanisms of Evolution

Natural selection remains a central theme in evolution. It explains how organisms adapt to their environments and how variations can give rise to adaptations within species. Scientists now know that natural selection is not the only mechanism of evolution. Studies in population genetics and molecular biology led to the development of evolutionary theory. At the center is the understanding that evolution occurs at the population level, with genes as the raw material.

Population genetics At the turn of the twentieth century, genes had not been discovered. However, the allele was understood to be one form of an inherited character trait, such as eye color, that gets passed down from parent to offspring. Scientists did not understand why dominant alleles would not simply overpower recessive alleles in a population.

In 1908, English mathematician Godfrey Hardy and German physician Wilhelm Weinberg independently came up with the same solution to this problem. They showed mathematically that evolution will not occur in a population unless allelic frequencies are acted upon by forces that cause change. In the absence of these forces, the allelic frequency remains the same and evolution doesn't occur. According to this idea, which is now known as the **Hardy-Weinberg principle**, when allelic frequencies remain constant, a population is in genetic equilibrium. This concept is illustrated in **Figure 14**.




CAREERS IN BIOLOGY

Biometrician Almost all scientific research papers include some statistics. Many researchers consult biometricians—people who specialize in statistics related to biology—to help design studies and analyze study results.

Connection to Math To illustrate the Hardy-Weinberg principle, consider a population of 100 humans. Forty people are homozygous dominant for earlobe attachment (EE). Another 40 people are heterozygous (Ee). Twenty people are homozygous recessive (ee). In the 40 homozygous dominant people, there are 80 E alleles ($2 E$ alleles \times 40); and in the 20 homozygous recessive people, there are 40 e alleles ($2 e$ alleles \times 20). The heterozygous people have 40 E alleles and 40 e alleles. Summing the alleles, we have 120 E alleles and 80 e alleles for a total of 200 alleles. The E allele frequency is $120/200$, or 0.6. The e allele frequency is $80/200$, or 0.4.

The Hardy-Weinberg principle states that the allele frequencies in populations should be constant. This often is expressed as $p + q = 1$. For our example, p can represent the E allele frequency and q can represent the e allele frequency.

Squaring both sides of the equation yields the new equation $p^2 + 2pq + q^2 = 1$. This equation allows us to determine the equilibrium frequency of each genotype in the population: homozygous dominant (p^2), heterozygous ($2pq$), and homozygous recessive (q^2). From the above example, $p = 0.6$, and $q = 0.4$, so $(0.6)(0.6) + 2(0.6)(0.4) + (0.4)(0.4) = 1$. In the example population, the equilibrium frequency for homozygous dominant will be 0.36, the equilibrium frequency of heterozygous will be 0.48, and the equilibrium frequency of homozygous recessive will be 0.16. Note that the sum of these frequencies equals one.

 **Reading Check** Determine when a population is in equilibrium.

Conditions According to the Hardy-Weinberg principle, a population in genetic equilibrium must meet five conditions: there must be no genetic drift, no gene flow, no mutation, mating must be random, and there must be no natural selection. Populations in nature might meet some of these requirements, but hardly any population meets all five conditions for long periods of time. If a population is not in genetic equilibrium, at least one of the five conditions has been violated. These five conditions, listed in **Table 3**, are known mechanisms of evolutionary change.

Table 3

The Hardy-Weinberg Principle



Interactive Table


Condition	Violation	Consequence
The population is very large.	Many populations are small.	Chance events can lead to changes in population traits.
There is no immigration or emigration.	Organisms move in and out of the population.	The population can lose or gain traits with movement of organisms.
Mating is random.	Mating is not random.	New traits do not pass as quickly to the rest of the population.
Mutations do not occur.	Mutations occur.	New variations appear in the population with each new generation.
Natural selection does not occur.	Natural selection occurs.	Traits in a population change from one generation to the next.

Genetic drift Any change in the allelic frequencies in a population that results from chance is called **genetic drift**. Recall that for simple traits, only one of a parent's two alleles passes to the offspring, and that this allele is selected randomly through independent assortment. In large populations, enough alleles "drift" to ensure that the allelic frequency of the entire population remains relatively constant from one generation to the next. In smaller populations, however, the effects of genetic drift become more pronounced, and the chance of losing an allele becomes greater.

Founder effect The founder effect is an extreme example of genetic drift. The **founder effect** can occur when a small sample of a population settles in a location separated from the rest of the population. Because this sample is a random subset of the original population, the sample population carries a random subset of the population's genes. Alleles that were uncommon in the original population might be common in the new population, and the offspring in the new population will carry those alleles. Such an event can result in large genetic variations in the separated populations.

The founder effect is evident in the Amish and Mennonite communities in the United States, in which the people rarely marry outside their own communities. The Old Order Amish have a high frequency of six-finger dwarfism. All affected individuals can trace their ancestry back to one of the founders of the Order.







Bottleneck Another extreme example of genetic drift is a **bottleneck**, which occurs when a population declines to a very low number and then rebounds. The gene pool of the rebound population often is genetically similar to that of the population at its lowest level, that is, it has reduced diversity. Researchers think that cheetahs in Africa experienced a bottleneck 10,000 years ago, and then another one about 100 years ago. Throughout their current range, shown in **Figure 15**, cheetahs are so genetically similar that they appear inbred. Inbreeding decreases fertility, and might be a factor in the potential extinction of this endangered species.

 **Reading Check Explain** how genetic drift affects populations.

Study Tip

Concept Map Make a concept map, placing the term *evolution* in the top oval. The second row of ovals should contain the following terms: *genetic drift*, *gene flow*, *nonrandom mating*, *mutation*, and *natural selection*. As you read the chapter, fill in definitions and write examples that illustrate each term.

Cheetah Range

-  No cheetahs
-  Range around the year 1900
- Present range**
-  High density
-  Medium density
-  Low density
-  Protected area

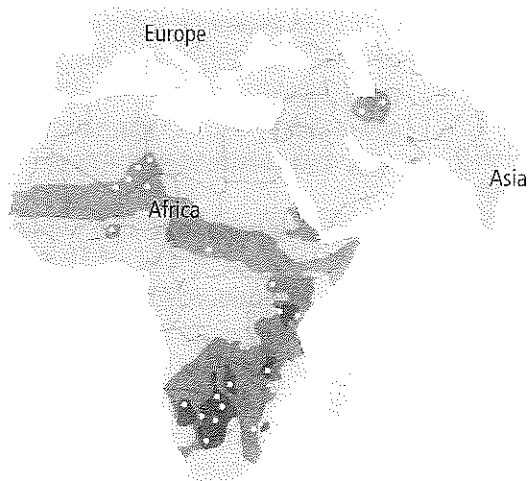


Figure 15 The map shows the present range of cheetahs in Africa. It is believed that cheetahs had a much larger population until a bottleneck occurred.

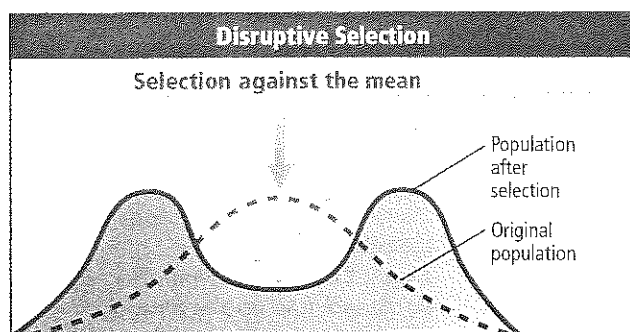
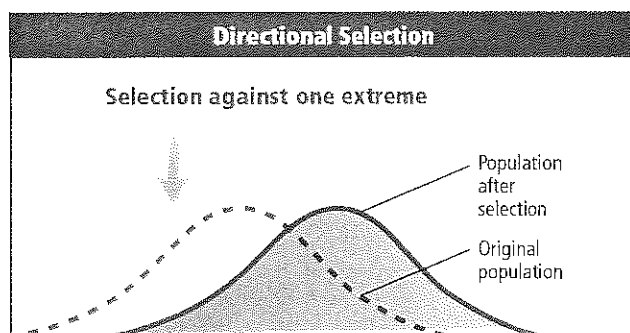
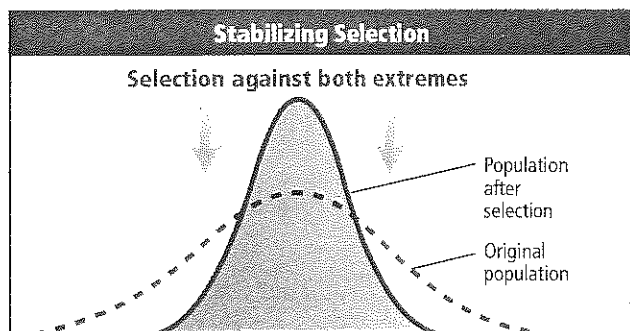
Apply Concepts *What effect has the bottleneck had on the reproductive rate of cheetahs?*





Personal Tutor

✳ **Figure 16** Natural selection can alter allele frequencies of a population in three ways. The bell-shaped curve shown as a dotted line in each graph indicates the trait's original variation in a population. The solid line indicates the outcome of each type of selection pressure.



Gene flow A population in genetic equilibrium experiences no gene flow. It is a closed system, with no new genes entering the population and no genes leaving the population. In reality, few populations are isolated. The random movement of individuals between populations, or migration, increases genetic variation within a population and reduces differences between populations.

Nonrandom mating Rarely is mating completely random in a population. Usually, organisms mate with individuals in close proximity. This promotes inbreeding and could lead to a change in allelic proportions favoring individuals that are homozygous for particular traits.

Mutation Recall that a mutation is a random change in genetic material. The cumulative effect of mutations in a population might cause a change in allelic frequencies and thus violate genetic equilibrium. Although many mutations cause harm or are lethal, occasionally a mutation provides an advantage to an organism. This mutation will then be selected for and become more common in subsequent generations. In this way, mutations provide the raw material upon which natural selection works.

✓ **Reading Check** Summarize how mutation violates the Hardy-Weinberg principle.

Natural selection The Hardy-Weinberg principle requires that all individuals in a population be equally adapted to their environment and thus contribute equally to the next generation. As you have learned, this rarely happens. Natural selection acts to select the individuals that are best adapted for survival and reproduction. Natural selection acts on an organism's phenotype and changes allelic frequencies. **Figure 16** shows three main ways in which natural selection alters phenotypes: through stabilizing selection, directional selection, and disruptive selection. A fourth type of selection, sexual selection, also is considered a type of natural selection.

Stabilizing selection The most common form of natural selection is **stabilizing selection**. It operates to eliminate extreme expressions of a trait when the average expression leads to higher fitness. For example, human babies born with below-normal and above-normal birth weights have lower chances of survival than babies born with average weights. Therefore, birth weight varies little in human populations.



Directional selection If an extreme version of a trait makes an organism more fit, **directional selection** might occur. This form of selection increases the expression of the extreme versions of a trait in a population. One example is the evolution of moths in industrial England. The peppered moth has two color forms, or morphs, as shown in **Figure 17**. Until the mid-1850s, nearly all peppered moths in England had light-colored bodies and wings. Beginning around 1850, however, dark moths began appearing. By the early 1900s, nearly all peppered moths were dark. Why? Industrial pollution favored the dark-colored moths at the expense of the light-colored moths. The darker the moth, the more it matched the sooty background of its tree habitat, and the harder it was for predators to see. Thus, more dark moths survived, adding more genes for dark color to the population. This conclusion was reinforced in the mid-1900s, when the passage of air pollution laws led to the resurgence of light-colored moths. This phenomenon is called industrial melanism.

Directional selection also can be seen in Galápagos finches. For three decades in the latter part of the twentieth century, Peter and Rosemary Grant studied populations of these finches. The Grants found that during drought years, food supplies dwindled and the birds had to eat the hard seeds that they normally ignored. Birds with the largest beaks were more successful in cracking the tough seed coatings than were birds with smaller beaks. As a result, over the duration of the drought, birds with larger beaks came to dominate the population. In rainy years, however, the directional trend was reversed, and the population's average beak size decreased.




Figure 17 The peppered moth exists in two forms: light-colored and dark-colored. Infer how natural selection might have caused a change in the frequencies of the two forms.

DATA ANALYSIS LAB 2

Based on Real Data*

Interpret the Graph

How does pollution affect melanism in moths?

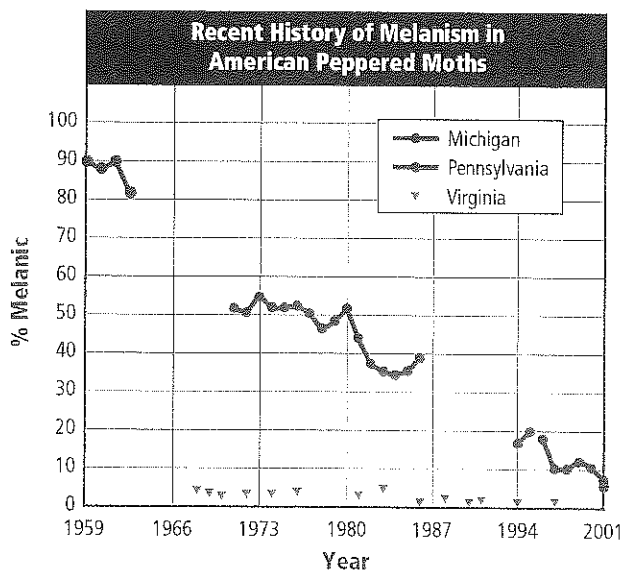
The changing frequencies of light-colored and dark-colored moths have been studied for decades in the United States. The percentage of the melanic, or dark, form of the moth was low prior to the Industrial Revolution. It increased until it made up nearly the entire population in the early 1900s. After antipollution laws were passed, the percentage of melanic moths declined, as shown in the graph.

Think Critically


- Interpret** the percent decrease in Pennsylvania melanic moth population.
- Hypothesize** why the percentage of melanic moths might have remained at a relatively low level in Virginia.

*Data obtained from: Grant, B. S. and L. L. Wiseman. 2002. Recent history of melanism in American peppered moths. *Journal of Heredity* 93: 86-90.

Data and Observations



✦ **Figure 18** Northern water snakes have two different color patterns, depending on their habitats. Intermediate color patterns would make them more visible to predators.



Disruptive selection Another type of natural selection, **disruptive selection**, is a process that splits a population into two groups. It tends to remove individuals with average traits but retain individuals expressing extreme traits at both ends of a continuum. Northern water snakes, illustrated in **Figure 18**, are an example. Snakes living on the mainland shores inhabit grasslands and have mottled brown skin. Snakes inhabiting rocky island shores have gray skin. Each is adapted to its particular environment. A snake with intermediate coloring would be disadvantaged because it would be more visible to predators.

Sexual selection Another type of natural selection, in which change in frequency of a trait is based on the ability to attract a mate is called **sexual selection**. This type of selection often operates in populations in which males and females differ significantly in appearance. Usually in these populations, males are the largest and most colorful of the group. The bigger the tail of a male peacock, as shown in **Figure 19**, the more attractive the bird is to females. Males also evolve threatening characteristics that intimidate other males; this is common in species, such as elk and deer, where the male keeps a harem of females.


Darwin wondered why some qualities of sexual attractiveness appeared to be the opposite of qualities that might enhance survival. For example, the peacock's tail, while attracting females, is large and cumbersome, and it might make the peacock a more likely target for predators. Although some modern scientists think that sexual selection is not a form of natural selection, others think that sexual selection follows the same general principle: brighter colors and bigger bodies enhance reproductive success, whatever the chances are for long-term survival.



Launch Lab

Review Based on what you have learned about adaptation, how would you now answer the analysis questions?

✦ **Figure 19** Peacocks that have the largest tails tend to attract more peahens. The frequency of this trait increases because of sexual selection.






Figure 20 The map shows the overlapping ranges of the Eastern meadowlark and Western meadowlark. While the two are similar in appearance, their songs separate them behaviorally.

Infer how different songs prevent the meadowlarks from breeding.

Reproductive Isolation


Mechanisms of evolution—genetic drift, gene flow, nonrandom mating, mutation, and natural selection—violate the Hardy-Weinberg principle. To what extent each mechanism contributes to the origin of new species is a major topic of debate in evolutionary science today. Most scientists define speciation as the process whereby some members of a sexually reproducing population change so much that they can no longer produce fertile offspring with members of the original population. Two types of reproductive isolating mechanisms prevent gene flow among populations. **Prezygotic isolating mechanisms** operate before fertilization occurs. **Postzygotic isolating mechanisms** operate after fertilization has occurred to ensure that the resulting hybrid remains infertile.

Prezygotic isolation Prezygotic isolating mechanisms prevent reproduction by making fertilization unlikely. These mechanisms prevent genotypes from entering a population's gene pool through geographic, ecological, behavioral, or other differences. For example, the Eastern meadowlark and the Western meadowlark, pictured in **Figure 20**, have overlapping ranges and are similar in appearance. These two species, however, use different mating songs and do not interbreed. Time is another factor in maintaining a reproductive barrier. Closely related species of fireflies mate at different times of night, just as different species of trout live in the same stream but breed at different times of the year.

Postzygotic isolation When fertilization has occurred but a hybrid offspring cannot develop or reproduce, postzygotic isolation has occurred. Postzygotic isolating mechanisms prevent offspring survival or reproduction. A lion and a tiger are considered separate species because even though they can mate, the offspring—like the tigon, shown in **Figure 21**—is often sterile.



Figure 21 The offspring of a male tiger and a female lion is a tigon.



VOCABULARY

ACADEMIC VOCABULARY

Isolation

the condition of being separated from others

After infection, a patient is kept in isolation from other patients to prevent the infection from spreading.

Speciation

For speciation to occur, a population must diverge and then be reproductively isolated. Biologists usually recognize two types of speciation: allopatric and sympatric.

Allopatric speciation In **allopatric speciation**, a physical barrier divides one population into two or more populations. The separate populations eventually will contain organisms that, if enough time has passed, will no longer be able to breed successfully with one another. Most scientists think that allopatric speciation is the most common form of speciation. Small subpopulations isolated from the main population have a better chance of diverging than those living within it. This was the conclusion of biologist Ernst Mayr, who argued as early as the 1940s that geographic isolation was not only important but also was required for speciation.


Geographic barriers can include mountain ranges, channels between islands, wide rivers, and lava flows. The Grand Canyon, pictured in **Figure 22**, is an example of a geographic barrier. The Kaibab squirrel is found on the canyon's north rim, while the Abert squirrel lives on the south rim. Scientists think that the two types of squirrels diverged from an ancestral species and today are reproductively isolated by the width of the canyon. While these animals officially belong to the same species, they demonstrate distinct differences and, in time, they might diverge enough to be classified as separate species.

Sympatric speciation In **sympatric speciation**, a species evolves into a new species without a physical barrier. The ancestor species and the new species live side-by-side during the speciation process. Evidence of sympatric evolution can be seen in several insect species, including apple maggot flies, which appear to be diverging based on the type of fruit they eat. Scientists think that sympatric speciation happens fairly frequently in plants, especially through polyploidy. Recall that polyploidy is a mutation that increases a plant's chromosome number. As a result, the plant is no longer able to interbreed with the main population.

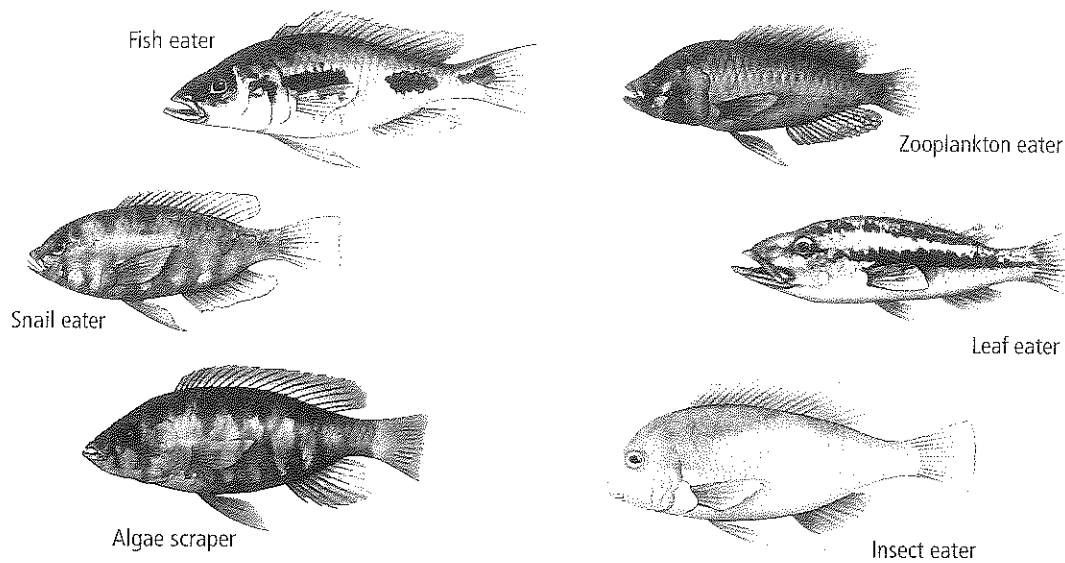
✱ **Figure 22** The Grand Canyon is a geographic barrier separating the Abert and Kaibab squirrels.



Abert squirrel



Kaibab squirrel



• **Figure 23** More than 300 species of cichlid fishes once lived in Lake Victoria. Their adaptive radiation is remarkable because it is thought to have occurred in less than 14,000 years.

Patterns of Evolution

Many details of the speciation process remain unresolved. Relative to the human life span, speciation is a long process, and first-hand accounts of speciation are expected to be rare. However, evidence of speciation is visible in patterns of evolution.

Adaptive radiation More than 300 species of cichlid fish, six of which are illustrated in **Figure 23**, once lived in Africa's Lake Victoria. Data show that these species diverged from a single ancestor within the last 14,000 years. This is a dramatic example of a type of speciation called **adaptive radiation**. Adaptive radiation, also called divergent evolution, can occur in a relatively short time when one species gives rise to many species in response to the creation of a new habitat or another ecological opportunity. Likely, a combination of factors caused the explosive radiation of the cichlids, including the appearance of a unique double jaw, which allowed these fish to exploit various food sources. Adaptive radiation often follows large-scale extinctions. Adaptive radiation of mammals at the beginning of the Cenozoic era following the extinction of dinosaurs likely produced the diversity of mammals visible today.

Coevolution Many species evolve in close relationship with other species. The relationship might be so close that the evolution of one species affects the evolution of other species. This is called coevolution. Mutualism is one form of coevolution. Mutualism occurs when two species benefit each other. For example, comet orchids and the moths that pollinate them have coevolved an intimate dependency: the foot-long flowers of this plant perfectly match the foot-long tongue of the moth, shown in **Figure 24**.











In another form of coevolution, one species can evolve a parasitic dependency on another species. This type of relationship is often called a coevolutionary arms race. The classic example is a plant and an insect pathogen that is dependent on the plant for food. The plant population evolves a chemical defense against the insect population. The insects, in turn, evolve the biochemistry to resist the defense. The plant then steps up the race by evolving new defenses, the insect escalates its response, and the race goes on. Complex coevolutionary relationships like these might reflect thousands of years of evolutionary interaction.

• **Figure 24** By coevolving, this moth has a foot-long tongue, which is coiled, in order to pollinate the comet orchid.



Table 4**Convergent Evolution**

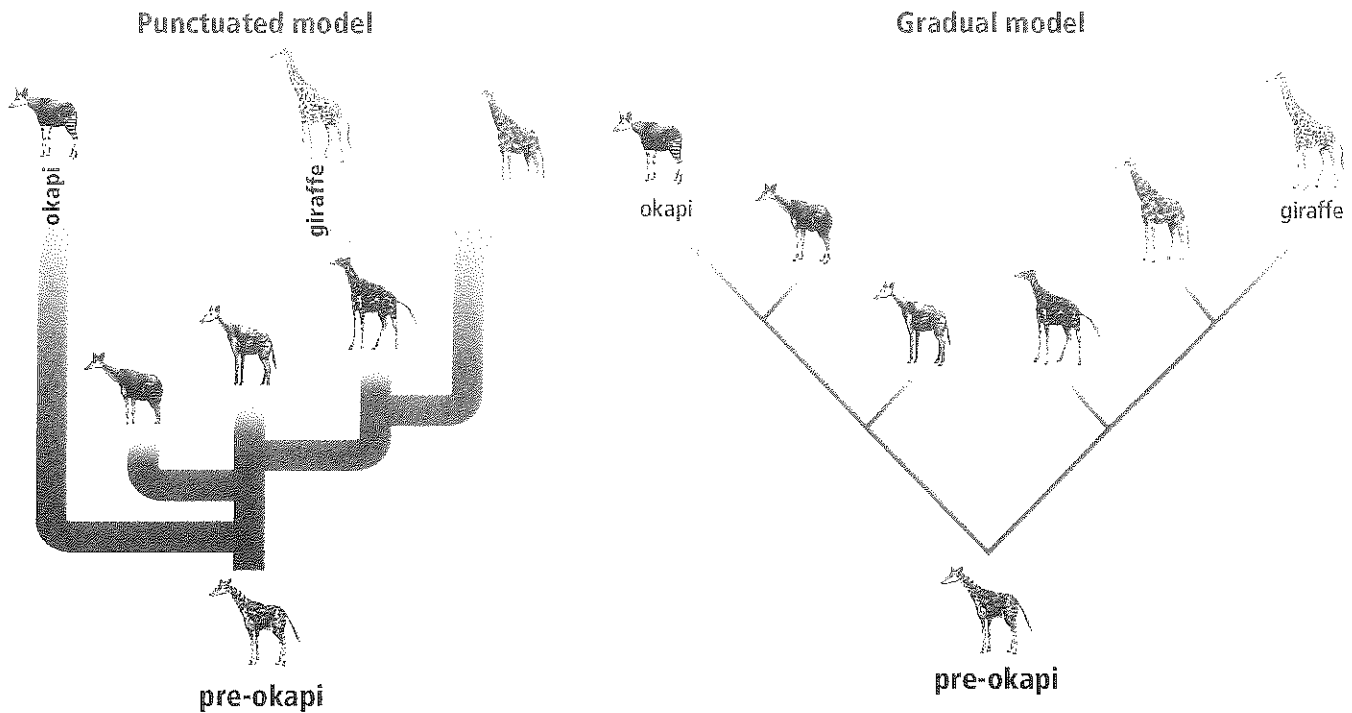
Interactive Table

Niche	Placental Mammals	Australian Marsupials
Burrower	 Mole	 Marsupial mole
Anteater	 Lesser anteater	 Numbat (anteater)
Mouse	 Mouse	 Marsupial mouse
Glider	 Flying squirrel	 Flying phalanger
Wolf	 Wolf	 Tasmanian wolf

Convergent evolution Sometimes unrelated species evolve similar traits even though they live in different parts of the world. This is called convergent evolution. Convergent evolution occurs in environments that are geographically far apart but have similar ecology and climate. The mara and rabbit discussed in Section 2 provide an example of convergent evolution. The mara and the rabbit are unrelated, but because they inhabit similar niches, they have evolved similarities in morphology, physiology, and behavior. **Table 4** shows examples of convergent evolution between Australian marsupials and the placental mammals on other continents.

Rate of speciation Evolution is a dynamic process. In some cases, as in a coevolutionary arms race, traits might change rapidly. In other cases, traits might remain unchanged for millions of years. Most scientists think that evolution proceeds in small, gradual steps. This is a theory called **gradualism**. A great deal of evidence favors this theory. However, the fossil record contains instances of abrupt transitions. For example, certain species of fossil snails looked the same for millions of years, and then the shell shape changed dramatically in only a few thousand years. The theory of **punctuated equilibrium** attempts to explain such abrupt transitions in the fossil record. According to this theory, rapid spurts of genetic change cause species to diverge quickly; these periods punctuate much longer periods when the species exhibit little change.





The two theories for the tempo of evolution are illustrated in **Figure 25**. The tempo of evolution is an active area of research in evolutionary theory today. Does most evolution occur gradually or in short bursts? Fossils can show only morphological structures. Changes in internal anatomy and function go unnoticed. How, then, does one examine the past for evidence?

The question of the tempo of evolution is an excellent illustration of how science works. Solving this puzzle requires insights from a variety of disciplines using a variety of methods. Like many areas of scientific endeavor, evolution offers a complex collection of evidence, and it does not yield easily to simple analysis.

Figure 25 Gradualism and punctuated equilibrium are two competing models describing the tempo of evolution.



Animation

Section 3 Assessment

Section Summary

- The Hardy-Weinberg principle describes the conditions within which evolution does not occur.
- Speciation often begins in small, isolated populations.
- Selection can operate by favoring average or extreme traits.
- Punctuated equilibrium and gradualism are two models that explain the tempo of evolution.

Understand Main Ideas

1. **Describe** one new mechanism of evolution that scientists learned after Darwin's book was published.
2. **Identify** three of the conditions of the Hardy-Weinberg principle.
3. **Discuss** factors that can lead to speciation.
4. **Indicate** which pattern of evolution is shown by the many species of finches on the Galápagos Islands.

Think Critically

5. **Design an Experiment** Biologists discovered two populations of frogs separated by the Amazon River. What experiment could be designed to test whether the two populations are one species or two?

MATH in Biology

6. What type of mathematical results would you expect from the experiment you designed above if the two populations diverged only recently?



Online Quiz



BioDiscoveries


Madagascar: Island of Biodiversity

Move over, Galapagos Islands—another island is emerging as a prime example of biodiversity. Thousands of species of rare plants and animals live on Madagascar, including lemurs, frogs, geckos, chameleons, butterflies, and orchids. Scientists estimate that 80 percent of Madagascar's plants and animals are endemic, that is, they do not live anywhere else in the world. A scientific study published in 2009 reported that up to 221 new species of frogs had been found on Madagascar, which nearly doubles the number of amphibians found on the island so far.

Giant leaf-tailed gecko One of the reptile species is the giant leaf-tailed gecko (*Uroplatus fimbriatus*). As the name indicates, the tails of these nocturnal geckos are shaped like leaves, which helps camouflage them from predators. If a predator grabs a gecko's tail, it breaks off so the gecko can escape. The tail will grow back, but it might have a different appearance. These geckos' colorings also help them blend with their rainforest home, as they have some ability to change color to better blend with the trees.

Giant leaf-tailed geckos have other fascinating characteristics. They do not have eyelids, so they use their tongues to lick their eyeballs clean. Their toes are equipped with tiny bristles that allow them to run up smooth, vertical surfaces. And when these geckos are startled, they lift their heads and tails, open their mouths, and bark or scream.

Pygmy mouse lemur Lemurs are a group of primates that are endemic to Madagascar. There are 88 species of lemurs on the island, and the smallest is the pygmy mouse lemur (*Microcebus myoxinus*), the tiniest primate in the world.



The giant leaf-tailed gecko (above) and the pygmy mouse lemur (right) are both species that live only on Madagascar.

The pygmy mouse lemur is just 6 centimeters long with a 13 centimeter tail. It weighs only 30 grams. These nocturnal animals live mainly in trees and eat insects and fruit. The pygmy mouse lemur has large ears that it uses to listen for predators.

New species are discovered on Madagascar every year. As larger numbers of scientists turn their attention to this island, its status as one of the most important areas of biodiversity on the planet is likely to grow.

PUBLIC SPEAKING AND SOCIAL NETWORKING


Scavenger Hunt Your teacher will divide your class into several groups, giving each group a list of five species that are endemic to Madagascar. With your group, research the species. Present your findings to the class.

BIOLAB

CAN SCIENTISTS MODEL NATURAL SELECTION?

Background: Natural selection is the mechanism that Darwin proposed to explain evolution. Through natural selection, traits that allow individuals to have the most offspring in a given environment tend to increase in the population over time.

Question: How can natural selection be modeled in a laboratory setting?



Materials

small, medium, and large beads
forceps
short-nosed pliers
tray or pan
stopwatch

Safety Precautions



Procedure


1. Read and complete the lab safety form.
2. Divide into groups of three. One student will use forceps to represent one adult member of a predator population, one will use pliers to represent another adult member of the predator population, and the third will keep time and score.
3. Mix prey items (beads) on a tray or pan.
4. In 20 seconds, try to pick up all possible beads using forceps or pliers.
5. After 20 seconds, assign three points for each large bead, two points for each medium bead, and one point for each small bead.
6. Add up the points and use the following rules: survival requires 18 points, and the ability to produce a new offspring requires an additional 10 points.
7. Determine the number of survivors and the number of offspring.
8. Repeat the procedure 10 times and combine your data with the other groups.

Analyze and Conclude

1. **Calculate** Combining all of the trials of all of the groups, determine the percentage of forceps and pliers that survived.
2. **Evaluate** Using data from the entire class, determine the total number of offspring produced by the forceps adult and the plier adult.
3. **Summarize** The original population was divided evenly between the forceps adult and the plier adult. If all of the adults left, what would be the new population ratio? Use the results from the entire class.
4. **Infer** Given the survival and reproduction data, predict what will happen to the two organisms in the study. Which adult—the forceps or the pliers—is better adapted to produce more offspring?
5. **Conclude** Using the principles of natural selection, how is this population changing?

APPLY YOUR SKILL

Make Inferences Given the results of the experiment, how will the prey populations (beads) change as the predator population changes? Explain your inference.



THEME FOCUS Cause and Effect Environmental change can result in a change in allele frequencies of a population over time.

Big Idea The theory of evolution is supported by natural selection and explains the diversity of life.

Section 1 Darwin's Theory of Evolution by Natural Selection

artificial selection (p. 419)
natural selection (p. 420)
evolution (p. 422)

Big Idea Charles Darwin developed a theory of evolution based on natural selection.

- Darwin drew from his observations on the HMS Beagle and later studies to develop his theory of evolution by natural selection.
- Natural selection is based on ideas of excess reproduction, variation, inheritance, and advantages of certain traits in certain environments.
- Darwin reasoned that the process of natural selection eventually could result in the appearance of new species.

Section 2 Evidence of Evolution

derived trait (p. 424)
ancestral trait (p. 424)
homologous structure (p. 424)
vestigial structure (p. 425)
analogous structure (p. 426)
embryo (p. 426)
biogeography (p. 428)
fitness (p. 428)
camouflage (p. 428)
mimicry (p. 429)

Big Idea Multiple lines of evidence support the theory of evolution.

- Fossils provide strong direct evidence to support evolution.
- Homologous and vestigial structures indicate shared ancestry.
- Examples of embryological and biochemical traits provide insight into the evolution of species.
- Biogeography can explain why certain species live in certain locations.
- Natural selection gives rise to features that increase reproductive success.

Section 3 Shaping Evolutionary Theory

Hardy-Weinberg principle (p. 431)
genetic drift (p. 433)
founder effect (p. 433)
bottleneck (p. 433)
stabilizing selection (p. 434)
directional selection (p. 435)
disruptive selection (p. 436)
sexual selection (p. 436)
prezygotic isolating mechanism (p. 437)
postzygotic isolating mechanism (p. 437)
allopatric speciation (p. 438)
sympatric speciation (p. 438)
adaptive radiation (p. 439)
gradualism (p. 440)
punctuated equilibrium (p. 440)

Big Idea The theory of evolution continues to be refined as scientists learn new information.

- The Hardy-Weinberg principle describes the conditions within which evolution does not occur.
- Speciation often begins in small, isolated populations.
- Selection can operate by favoring average or extreme traits.
- Punctuated equilibrium and gradualism are two models that explain the tempo of evolution.

Section 1

Vocabulary Review


Replace the underlined portions of the sentences below with words from the Study Guide to make each sentence correct.

1. Natural selection is a mechanism for species change over time.
2. Selective breeding was used to produce pure-bred Chihuahuas and cocker spaniels.
3. Differential survival by members of a population with favorable adaptations is a mechanism for a theory developed by Charles Darwin.

Understand Main Ideas

4. Which best describes the prevailing view about the age of Earth and evolution before Darwin's voyage on the HMS *Beagle*?
 - A. Earth and life are recent and have remained unchanged.
 - B. Species evolved rapidly during the first six thousand to a few hundred thousand years.
 - C. Earth is billions of years old, but species have not evolved.
 - D. Species have evolved on Earth for billions of years.

Use the photo below to answer question 5.



5. Which statement about the tortoise above would be part of an explanation for tortoise evolution based on natural selection?
 - A. All tortoises look like the above tortoise.
 - B. Tortoises with domed shells have more young than tortoises with flat shells.
 - C. All the tortoises born on the island survive.
 - D. The tortoise shell looks nothing like the shell of either parent.

Constructed Response

6. **WRITE** Summarize Darwin's theory of evolution by using an example.
7. **Short Answer** How is artificial selection similar to natural selection?

Think Critically

8. **Sequence** Sequence events leading to evolution by natural selection.
9. **THEME FOCUS Cause and Effect** What is the likely evolutionary effect on a species of an increase in global temperatures over time?

Section 2


Vocabulary Review

The sentences below include terms that have been used incorrectly. Make the sentences true by replacing the italicized word with a vocabulary term from the Study Guide page.

10. Anatomical parts that have a reduced function in an organism are *analogous structures*.
11. *Biogeography* is a measure of the relative contribution an individual trait makes to the next generation.
12. *Camouflage* occurs when two or more species evolve adaptations to resemble each other.

Understand Main Ideas


Use the photos below to answer question 13.



13. These organisms have similar features that are considered what kind of structures?
 - A. vestigial
 - B. homologous
 - C. analogous
 - D. comparative



Use the photo below to answer question 14.



14. The photo of the bird above shows what kind of morphological adaptation?
- A. vestigial organ C. mimicry
B. camouflage D. analogous structure
15. Which is not an example of a morphological adaptation?
- A. Cytochrome *c* is similar in monkeys and humans.
B. Butterflies evolve similar color patterns.
C. A harmless species of snake resembles a harmful species.
D. Young birds have adaptations for blending into the environment.
16. Industrial melanism could be considered a special case of which of the following?
- A. embryological adaptation
B. mimicry
C. physiological adaptation
D. structural adaptation
17. Which sets of structures are homologous?
- A. a butterfly's wing and a bat's wing
B. a moth's eyes and a cow's eyes
C. a beetle's leg and a horse's leg
D. a whale's pectoral fin and a bird's wing

Constructed Response

18. **Short Answer** Describe how cytochrome *c* provides evidence of evolution.
19. **Short Answer** What can be concluded from the fact that many insects are resistant to certain pesticides?
20. **Think Critically** Why are fossils considered to provide the strongest evidence supporting evolution?

Think Critically

21. **Design an Experiment** How could you design an experiment to show that a species of small fish has the ability to evolve a camouflage color pattern?
22. **CAREERS IN BIOLOGY** An evolutionary biologist is studying several species of closely related lizards found on Cuba and surrounding islands. Each species occupies a somewhat different niche, but in some ways they all look similar to the green anole lizard found in Florida. Suggest the pattern of lizard evolution.

Section 3

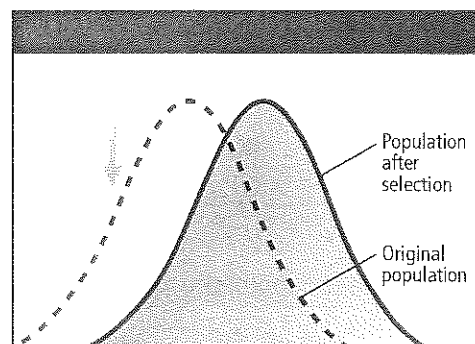
Vocabulary Review

Choose the vocabulary term from the Study Guide page that best matches each of the following descriptions.

23. one species evolves over millions of years to become two different but closely related species
24. a species evolves into a new species without a physical barrier
25. the random changes in gene frequency found in small populations

Understand Main Ideas


Use the figure below to answer question 26.



26. The graph above best represents which kind of selection?
- A. directional
B. disruptive
C. sexual
D. stabilizing



Use the photo below to answer question 27.



27. The plant in the above illustration looks like a cactus but is classified in a completely separate group of plants. This would be an example of which mechanism?
- adaptive radiation
 - disruptive selection
 - convergent evolution
 - punctuated equilibrium

Constructed Response

28. **Open Ended** Discuss why the Hardy-Weinberg principle is often violated in real populations.
29. **Open Ended** Sea stars eat clams by pulling apart the two halves of a clam's shell. Discuss how this could result in directional selection of clam muscle size.
30. **Short Answer** Compare and contrast genetic drift and natural selection as mechanisms of evolution.

Think Critically

31. **Make and Use Graphs** Draw a graph that would illustrate a population that has a wide variation of color from light to dark brown. Then draw on the same graph what that population would look like after several years of stabilizing selection. Label your graph.
32. **Think Critically** What would you conclude about the evolutionary process that produces two unrelated species that share similar niches on different continents?

Summative Assessment

33. **Write (Real)** Imagine that there has been a major climate shift. Most of Earth is covered in ice, and the equatorial regions are temperate. Describe how plant and animal distribution might change over time through natural selection. Also, describe new available niches that could develop and the types of organisms that may fill them.
34. **Writing in Biology** Imagine that you are Charles Darwin and write a letter to your father detailing your observations aboard the *Beagle*.
35. **Writing in Biology** Write a paragraph that explains why a genetic bottleneck can be an important evolutionary factor for a species.
36. Choose three lines of evidence that support evolution. Give an example of each.

DB Document-Based Questions

Darwin, Charles. 1859. *On the Origin of Species by Means of Natural Selection, or the Preservation of Favoured Races in the Struggle for Life*.

Naturalists continually refer to external conditions, such as climate, food, etc., as the only possible cause of variation. In one very limited sense, as we shall hereafter see, this may be true; but it is preposterous to attribute to mere external conditions, the structure, for instance, of the woodpecker, with its feet, tail, beak, and tongue, so admirably adapted to catch insects under the bark of trees.

37. In Darwin's time, most naturalists considered only external conditions as causes of variation. What nonexternal mechanism did Darwin propose as a cause of variation?
38. How would modern scientists explain the non-external mechanisms that Darwin proposed?
39. Consider Darwin's example of the woodpecker. Explain the role that natural selection has producing a bird species with a woodpeckerlike beak.




Standardized Test Practice

Cumulative


Multiple Choice

- Which experimental setup did Francesco Redi use to test the idea of spontaneous generation?
 - a flask filled with all the chemicals present on early Earth
 - mice sealed in jars with lit candles and jars with unlit candles
 - rotten meat in covered jars and uncovered jars
 - special flasks that were filled with broth

Use the illustration below of tortoises on two different islands to answer questions 2 and 3.



Large Island



Small Island

- The above illustrates which principle of natural selection?
 - inheritance
 - variation
 - differential reproduction
 - overproduction of offspring
- Tortoises that have shells with higher openings can eat taller plants. Others can only reach vegetation close to the ground. Judging from the differences in the tortoises' shells, what kind of vegetation would you expect to find on the large and small islands?
 - Both islands have a dense ground cover of low-growing plants.
 - Both islands have similar plants, but vegetation is more spread out on the large island.
 - On the large island, the land is mostly dry, and only tall trees grow.
 - The small island is less grassy, and plants grow with their leaves farther above ground.
- A dinosaur footprint in rocks would be which kind of fossil?
 - cast fossil
 - petrified fossil
 - replacement fossil
 - trace fossil
- Which concept is essential for the process of DNA fingerprinting?
 - location of genes for related traits on different chromosomes
 - organization of human DNA into 46 chromosomes
 - provision by DNA of the codes for proteins in the body
 - uniqueness of each person's pattern of noncoding DNA
- Chargaff's rules led to the understanding of which aspect of DNA structure?
 - base pairing
 - helix formation
 - alternation of deoxyribose and phosphate
 - placement of 3' and 5' carbons

Use the Punnett square below to answer question 7.

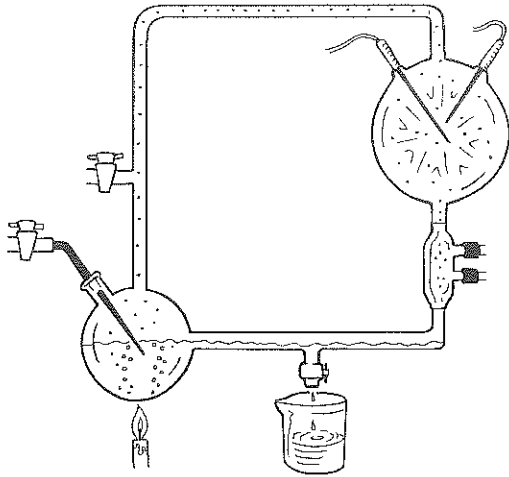
	B	?
b		
b		

- A test cross, shown in the Punnett square above, is used to determine the genotype of an animal that is expressing a dominant gene (B) for a particular characteristic. If the animal is homozygous for the dominant trait, which percentage of its offspring will have the dominant gene?
 - 25%
 - 50%
 - 75%
 - 100%
- What prevents the two strands of DNA from immediately coming back together after they unzip?
 - addition of binding proteins
 - connection of Okazaki fragments
 - parting of leading and lagging strands
 - use of multiple areas of replication



Short Answer

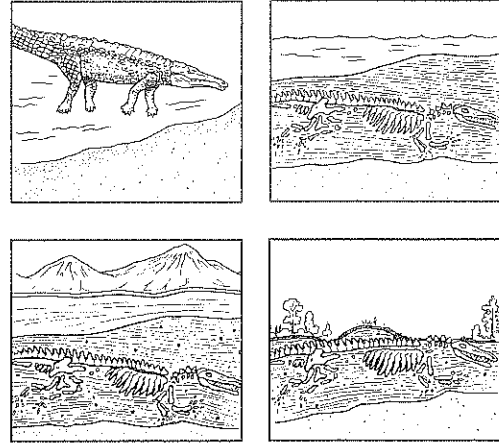
Use the diagram of Miller and Urey's experiment below to answer questions 9 and 10.



9. What are the possible consequences of a different mix of gases in the apparatus?
10. Some scientists think that lightning might not have been present on Earth in the past. What other energy sources might have caused these reactions?
11. Describe briefly how scientists could use a particular kind of bacteria to synthesize a specific protein.
12. Predict two positive outcomes and two negative outcomes of using transgenic plants for agricultural purposes.
13. Explain the connection between excess reproduction and the concept of natural selection as formulated by Darwin.
14. How would a primitive cell benefit from a symbiotic relationship with a mitochondrion?

Extended Response

Use the diagram below to answer questions 15 and 16.



15. Describe the process illustrated in the figure.
16. Explain why a fossil is more likely to form in a wet environment than in a dry environment.

Essay Question

Scientists think that archaea living today are similar to ancient archaea. Many archaea today are found in places such as hot springs, deep-ocean hydrothermal vents, polar ice, and other extreme environments. The organisms living in these environments might be similar to organisms that existed in the distant past.

Using the information in the paragraph above, answer the following question in essay format.

17. Scientists also study organisms in extreme environments to help identify where life might exist on other planets. Why would understanding the origins of life on Earth help with discovering life on other planets?

NEED EXTRA HELP?

If You Missed Question . . .	1	2	3	4	5	6	7	8	9	10	11	12	13	14	15	16	17
Review Section . . .	14.2	15.1, 15.3	15.1	14.1	12.1	13.1	10.2	12.2	14.2	14.2	13.2	13.2	15.1	14.2	14.1	14.1	14.2

